

DOWNLOAD PDF DOCUMENT



CHAPTER 9 TEST FORM B

DOWNLOAD DOCUMENT NOW

Updated: 10/16/2017

DISCLAIMER:

BE-FIRST.CO uses the following chapter 9 test form b book available for free PDF download which is also related with

CHAPTER 9 TEST FORM B

Our digital library offers you to download chapter 9 test form b and other files in PDF format for free. There is no need to pay for registration, but you will have to pass it in order to get an unlimited access to the stock of eBooks. So, if you need chapter 9 test form b, just follow the link below, pass the registration and enjoy reading chapter 9 test form b or other books from almost any advice supporting PDF format. You may ask why we ask our users to pass registration. It is done to simplify the work of the library and prevent countless hackers' attacks that cause certain discomfort to the users of our digital library. You need to register only once in order to get an access to chapter 9 test form b and other files. It will take you little time to register and then to download chapter 9 test form b.

DOWNLOAD NOW

DOWNLOAD PDF DOCUMENT

DOWNLOAD PDF DOCUMENT

CHAPTER 9 TEST FORM B

[IB CHAPTER 8 TEST FORM 2A DO NOT WRITE ON TEST](#)

For any credit show all work on a separate sheet of paper for all problems. 13.14. IB Chapter 8 Test Free Response Name: Date; Per: Answer each question on a separate sheet of paper. For each problem do the following: a. Copy or draw a figure. Mark the figure up with the given information. b. Show all calculations. c. Make sure your final answer has the correct units. 1.2.3.4.5. 6. ????. Bonus: a. b. ...

File name: Chapter 8 Test Form 2A including Free Response IB.pdf
[Download now or Read Online](#)

[EXAMVIEW - CHAPTER 14 TEST REVIEW- WILLIAMS.TST](#)

Name: Period: Date: K. Williams ID: A8th Grade Chapter 14 TEST REVIEW 1. Determine the volume of the cylinder. Use 3.14 for π . 2. Complete the table to identify the effect tripling the radius of a cylinder's base has on its volume. Cylinder radius Cylinder Area of Cylinder Height Cylinder Volume (cm³) r Base (cm) A πr^2 (cm²) h (cm) V $\pi r^2 h$ 1 1 3 1 9 1 3. Identify the radius, diameter, and height ...

File name: ExamView - Chapter 14 Test Review- Williams.pdf
[Download now or Read Online](#)

[MICROSOFT WORD - CHAPTER 2 TEST REVIEW ANSWERS.DOCX](#)

Honors Geometry Chapter 2 Test Review Question Answers 1. Given: BA \perp AT $(51 - x) + (y + 9) = 180$ Find: m \angle MAT $y = 120 + x$ $(y + 9) + (x + y) = 90$ B \perp x + 2y = 81 $x + 2(120 + x) = 81$ $x + 240 + 2x = 81$ $3x = -159$ M $51 - x$ y + 9 N A x + y $x = -53$ T $y = 120 + (-53) = 67$ m \angle MAT = $180 - (x + y) = 180 - 14 = 166$ 2. A certain angle is 39 less than 2 times its complement. Find its supplement. $x = 2(90 - ...$

File name: Chapter 2 Test Review Answers.pdf
[Download now or Read Online](#)

[MICROSOFT WORD - CHAPTER 11 TEST REVIEW QUESTION ANSWERS.DOCX](#)

Honors Geometry Chapter 11 Test Review Question Answers 1. Find the area of an equilateral triangle that has sides that measure 8 7 . s 2 3 A Equ. = $4(87)^2 3 = = (1123) u 2 4 4 2$. A rotor of a Wankel automotive engine has the geometric shape shown. The center of each arc is the opposite vertex of the equilateral triangle. a. Find the figure's area a. A = A + 3(A Segment) b. Find the figur...





















File name: Chapter 11 Test Review Question Answers.pdf
[Download now or Read Online](#)

DOWNLOAD PDF DOCUMENT

DOWNLOAD PDF DOCUMENT

Here below another book similar with:

CHAPTER 9 TEST FORM B

-  [glencoe geometry chapter 7 test form 2a answers](#)
-  [chapter 9 test form b](#)
-  [cogat form 7 practice test level 5 6 kindergarten](#)
-  [geometry test answers prentice hall form](#)
-  [nfpa 72 test record form](#)
-  [naruto chapter book vol 2 naruto chapter books](#)
-  [prentice hall biology chapter 13 test](#)
-  [apush chapter 1 10 test](#)
-  [miller levine biology chapter 16 practice test](#)
-  [holt spanish 1 chapter 5 test answer key](#)
-  [chapter 16 biology test answers](#)
-  [algebra 2 practice test chapter 1](#)
-  [biology chapter 1 3 test](#)
-  [geometry chapter 4 test answer key](#)
-  [whipping boy chapter test](#)
-  [life science chapter 15 test](#)
-  [american pageant eleventh edition chapter one test](#)
-  [ap statistics chapter 12 test answers](#)
-  [chapter 11 test geometry](#)
-  [chemistry chapter 12 test answers](#)

DOWNLOAD PDF DOCUMENT