

DOWNLOAD PDF DOCUMENT



CHAPTER 2 TEST GEOMETRY...

DOWNLOAD DOCUMENT NOW

Updated: 10/31/2017

DISCLAIMER:

BE-FIRST.CO uses the following chapter 2 test geometry answers book available for free PDF download which is also related with

CHAPTER 2 TEST GEOMETRY ANSWERS

We offer you to download chapter 2 test geometry answers as well as hundreds of other books in PDF format for free. The only condition is to pass a registration. You should click on the link below and then answer simple questions. It will not take more than a couple of minutes. Bear in mind that it is necessary to make the process of using our digital library more comfortable to you and other users; registration helps to devoid of hackers' attacks that are an ordinary thing on the Internet. Therefore, when you need chapter 2 test geometry answers or your friend is looking for a good online library to download chapter 2 test geometry answers for free, take advantage of our bargain and register now. When you need chapter 2 test geometry answers or other eBooks, just register on our site once and you will get a free access to a treasury of eBooks. You will be able to download chapter 2 test geometry answers on your device any time.

DOWNLOAD NOW

DOWNLOAD PDF DOCUMENT

DOWNLOAD PDF DOCUMENT

CHAPTER 2 TEST GEOMETRY...

[MICROSOFT WORD - CHAPTER 2 TEST REVIEW ANSWERS.DOCX](#)

Honors Geometry Chapter 2 Test Review Question Answers 1. Given: $BA \perp AT$ $(51 - x) + (y + 9) = 180$ Find: $m\angle MAT$ $y = 120 + x$ $(y + 9) + (x + y) = 90$ $B \perp x + 2y = 81$ $x + 2(120 + x) = 81$ $x + 240 + 2x = 81$ $3x = -159$ $M \perp 51 - x$ $y + 9$ $N \perp x + y$ $x = -53$ $T \perp y = 120 + (-53) = 67$ $m\angle MAT = 180 - (x + y) = 180 - 14 = 166$ 2. A certain angle is 39 less than 2 times its complement. Find its supplement. $x = 2(90 - \dots$

File name: Chapter 2 Test Review Answers.pdf

[Download now or Read Online](#)

[CHAPTER 15 TEST REVIEW](#)

1. Right triangle DEF has vertices at D(0, 0) and E(10, 0). What are the possible locations for point F? ? Anywhere on the lines $x = 0$ or $x = 10$ except at the points (0, 0) and (10,0). ? Also, at the point (5, 5). What other point will work? 2. Veronica draws a circle centered at the origin. It has a radius of 7.5 units. What are the x and y intercepts? ? (0, 7.5), (0, -7.5), (7.5, 0), (-7.5, 0) 1 3...

File name: Chapter 15 Test Review Answers.pdf

[Download now or Read Online](#)

[MICROSOFT WORD - CHAPTER 11 TEST REVIEW QUESTION ANSWERS.DOCX](#)

Honors Geometry Chapter 11 Test Review Question Answers 1. Find the area of an equilateral triangle that has sides that measure 8 7 . $s^2 \cdot 3 \cdot A_{Equ.} = 4 (8 7)^2 \cdot 3 \cdot 448 3 = = = (112 3) \cdot u^2 \cdot 4 \cdot 4 \cdot 2$. A rotor of a Wankel automotive engine has the geometric shape shown. The center of each arc is the opposite vertex of the equilateral triangle. a. Find the figure's area a. $A = A + 3(A_{Segment})$ b. Find the figur...

File name: Chapter 11 Test Review Question Answers.pdf

[Download now or Read Online](#)

[GEOMETRY - LAYSTROM - 6A - REVIEW FOR CHAPTER 8 TEST](#)

Geometry - Laystrom - 6A Name Review for Chapter 8 Test Period q 1210j113V yK5uHtraU 0SUo4fctFwPa1rhev kLlLxCF.v G KAElllu vrwiEgOhFtMsO zrlE0sgeHrZvKeYdy.5 Find the value of x. 1) 2) 22 $(2x + 1) \cdot 61 (6x + 2) \cdot 3) (23 + x) \cdot (2x + 1)$ Solve for x. 4) U V 99 $7x + 11$ 81 99 T S Find the measure of each angle indicated. 5) m \angle T Q T 14 $x + 8$ 80 $7x + 9$ 95 S R Classify each triangle by its angles and sides. 6...

File name: Geometry - Laystrom - 6A - Review for Chapter 8 Test.pdf





















[Download now or Read Online](#)

DOWNLOAD PDF DOCUMENT

DOWNLOAD PDF DOCUMENT

Here below another book similar with:

CHAPTER 2 TEST GEOMETRY...

-  [glencoe geometry chapter 7 test form 2a answers](#)
-  [chapter 2 test geometry answers](#)
-  [geometry chapter 4 test answer key](#)
-  [chapter 11 test geometry](#)
-  [geometry chapter 12 mid quiz answers](#)
-  [discovering geometry answers chapter 4](#)
-  [holt geometry geometry answer key](#)
-  [geometry chapter 1 study guide](#)
-  [chapter 5 unit 6 geometry](#)
-  [mcdougal littell geometry chapter 4 resource book](#)
-  [cumulative test holt geometry answers](#)
-  [holt geometry test answers](#)
-  [geometry test answers prentice hall form](#)
-  [e2020 topic test answers geometry](#)
-  [diagnostic geometry test answers](#)
-  [geometry standardized test practice workbook answers california](#)
-  [answers holt geometry 10 3 practice answers](#)
-  [naruto chapter book vol 2 naruto chapter books](#)
-  [chapter 16 biology test answers](#)
-  [ap statistics chapter 12 test answers](#)

DOWNLOAD PDF DOCUMENT